

Four on the Floor

4 8 12 16 20 24 28 32 36 40

**Directions:** Write the answer in the box next to each problem.

$4 \times 4 =$

$6 \times 4 =$

$1 \times 4 =$

$5 \times 4 =$

$2 \times 4 =$

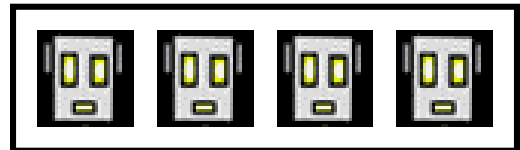
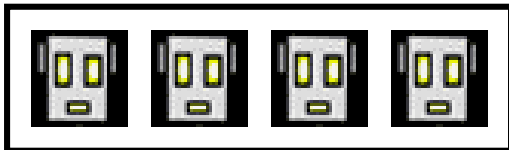
$8 \times 4 =$

$3 \times 4 =$

$7 \times 4 =$

$10 \times 4 =$

**Directions:** Write the problem that goes with each array on the line below. An example has been done for you.




2 X 4 = 8



\_\_\_\_\_

# Four on the Floor Cont'



# TEACHER and the ROCKBOTS®

## "Four on the Floor" Answer Key

4 8 12 16 20 24 28 32 36 40

$4 \times 4 = 16$

$6 \times 4 = 24$

$1 \times 4 = 4$

$5 \times 4 = 20$

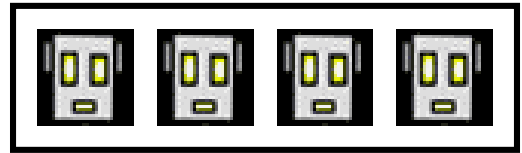
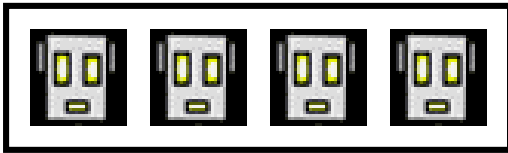
$2 \times 4 = 8$

$8 \times 4 = 32$

$3 \times 4 = 12$

$7 \times 4 = 28$

$10 \times 4 = 40$




$2 \times 4 = 8$



$4 \times 4 = 16$

"Four on the Floor" Answer Key Cont'



$$5 \times 4 = 20$$



$$3 \times 4 = 12$$

